

1. Finde das Ergebnis.


Beispiel:



$$6 - 5 = \square$$



$$5 - 3 = \square$$



$$4 - 2 = \square$$




$$3 - 1 = \square$$




$$2 - 1 = \square$$

2. Finde das Ergebnis.



$1 - 0 = \underline{\quad}$

$1 - 1 = \underline{\quad}$



$2 - 0 = \underline{\quad}$

$2 - 1 = \underline{\quad}$

$2 - 2 = \underline{\quad}$



$3 - 0 = \underline{\quad}$

$3 - 1 = \underline{\quad}$

$3 - 2 = \underline{\quad}$

$3 - 3 = \underline{\quad}$



$4 - 0 = \underline{\quad}$

$4 - 1 = \underline{\quad}$

$4 - 2 = \underline{\quad}$

$4 - 3 = \underline{\quad}$

$4 - 4 = \underline{\quad}$



$5 - 0 = \underline{\quad}$

$5 - 1 = \underline{\quad}$

$5 - 2 = \underline{\quad}$

$5 - 3 = \underline{\quad}$

$5 - 4 = \underline{\quad}$

$5 - 5 = \underline{\quad}$



$6 - 0 = \underline{\quad}$

$6 - 1 = \underline{\quad}$

$6 - 2 = \underline{\quad}$

$6 - 3 = \underline{\quad}$

$6 - 4 = \underline{\quad}$

$6 - 5 = \underline{\quad}$

$6 - 6 = \underline{\quad}$

3. Finde das Ergebnis.

$2 - 0 = \underline{\quad}$

$2 - 1 = \underline{\quad}$

$2 - 2 = \underline{\quad}$

$3 - 0 = \underline{\quad}$

$3 - 1 = \underline{\quad}$

$3 - 2 = \underline{\quad}$

$3 - 3 = \underline{\quad}$

$4 - 0 = \underline{\quad}$

$4 - 1 = \underline{\quad}$

$4 - 2 = \underline{\quad}$

$4 - 3 = \underline{\quad}$

$4 - 4 = \underline{\quad}$

$5 - 0 = \underline{\quad}$

$5 - 1 = \underline{\quad}$

$5 - 2 = \underline{\quad}$

$5 - 3 = \underline{\quad}$

$5 - 4 = \underline{\quad}$

$5 - 5 = \underline{\quad}$

$6 - 0 = \underline{\quad}$

$6 - 1 = \underline{\quad}$

$6 - 2 = \underline{\quad}$

$6 - 3 = \underline{\quad}$

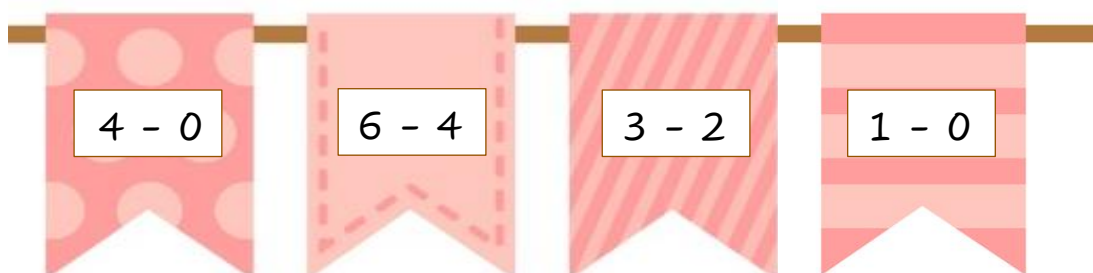
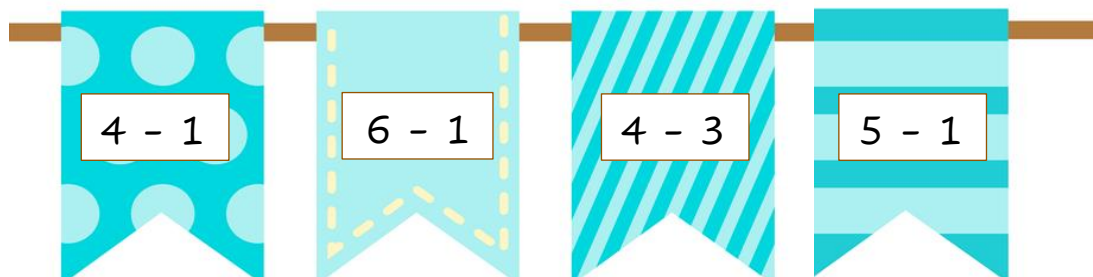
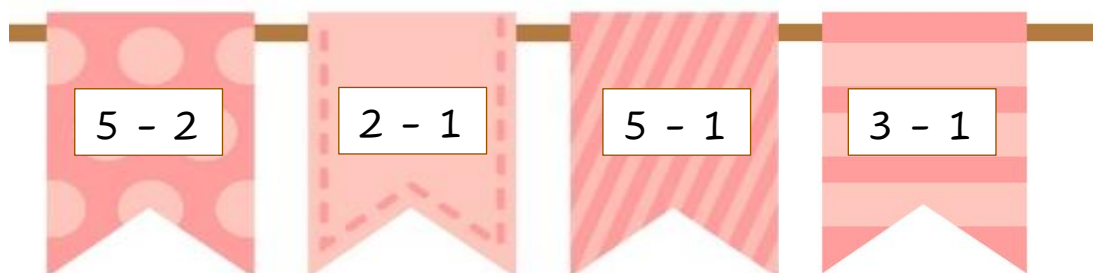
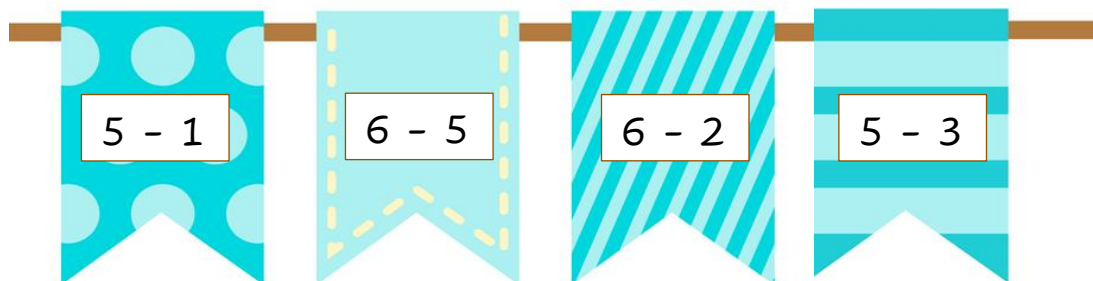
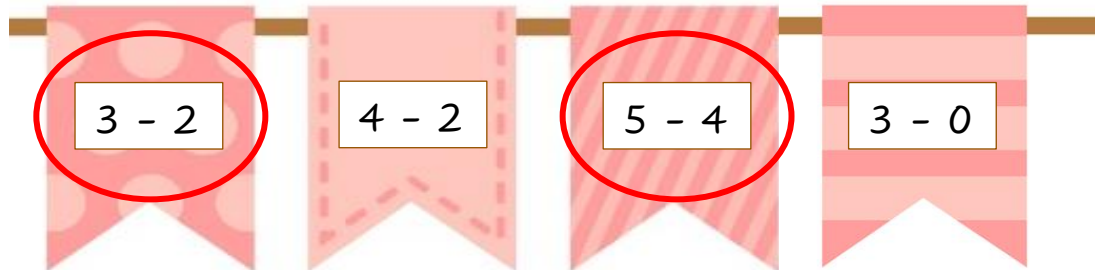
$6 - 4 = \underline{\quad}$

$6 - 5 = \underline{\quad}$

$6 - 6 = \underline{\quad}$

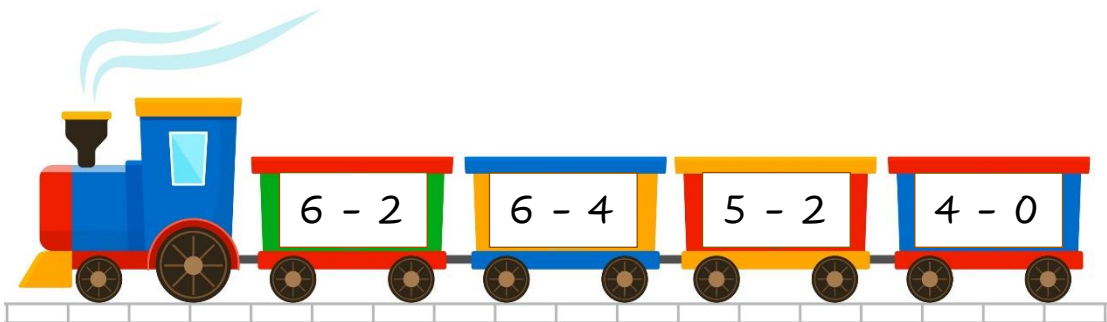
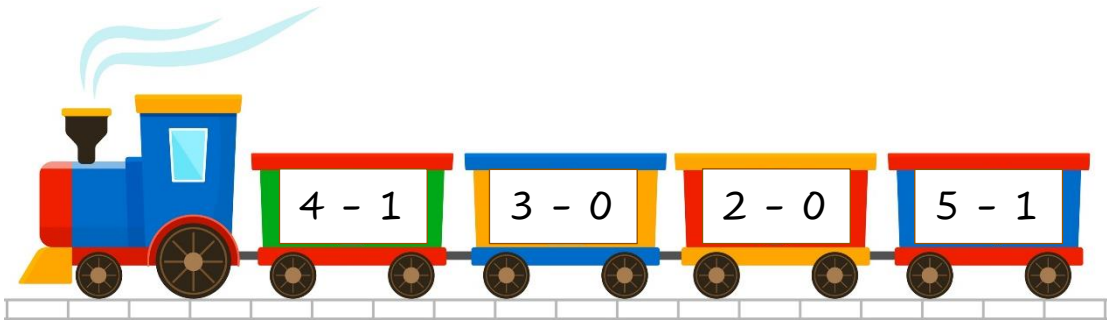
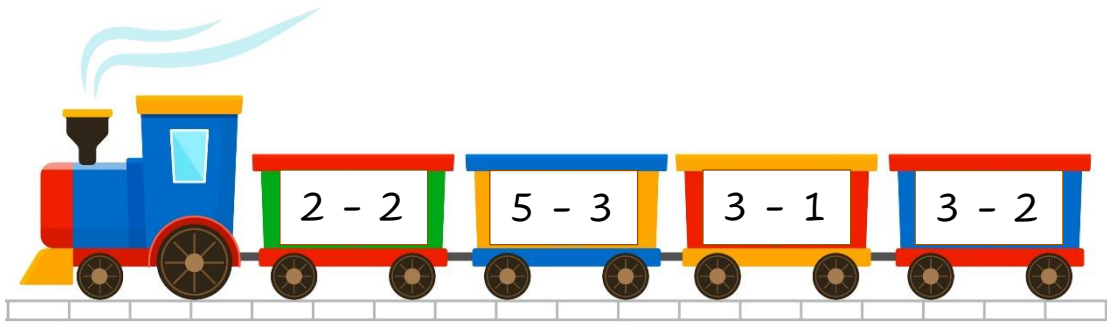
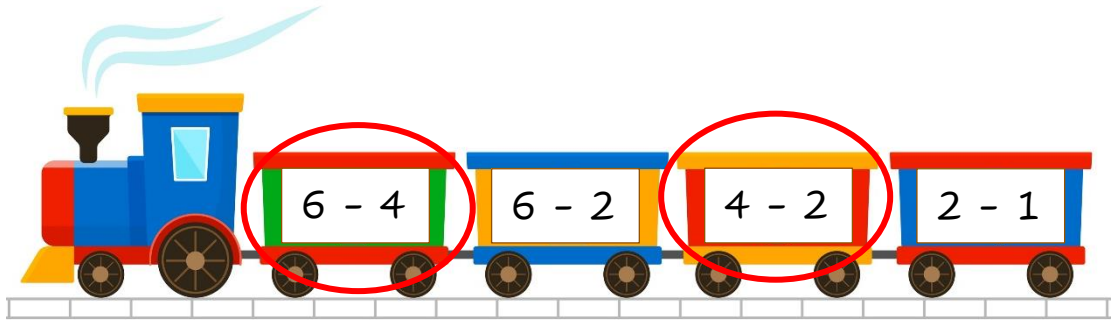
4. Kreise in jeder Zeile die Aufgaben ein, die das Ergebnis 1 haben.

Beispiel:



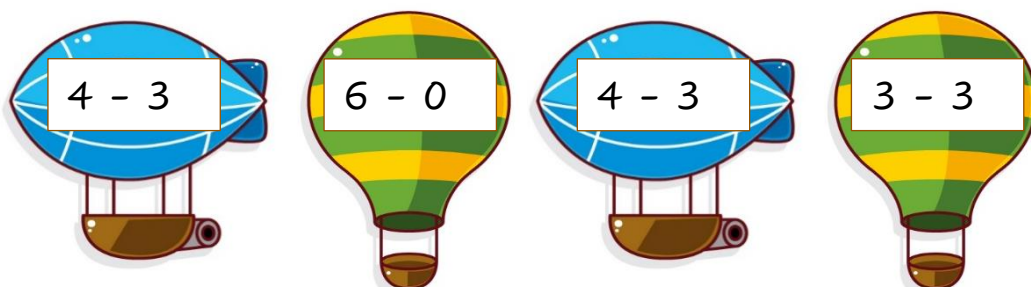
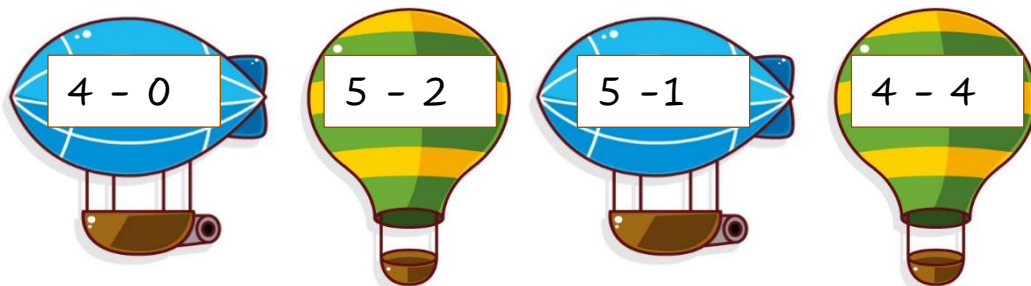
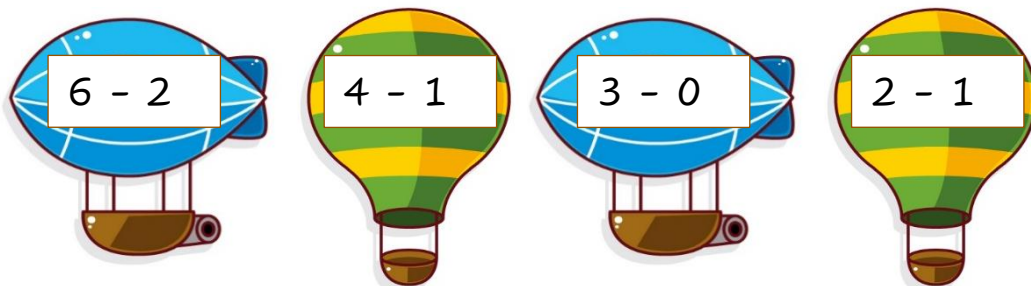
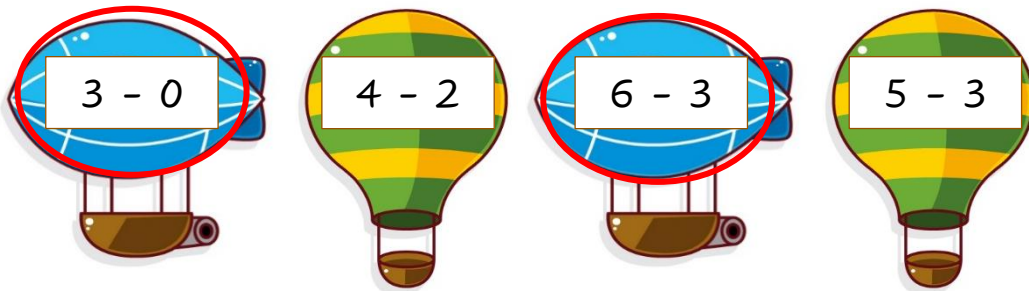
5. Kreise in jeder Zeile die Aufgaben ein, die das Ergebnis 2 haben.

Beispiel:



6. Kreise in jeder Zeile die Aufgaben ein, die das Ergebnis 3 haben.

Beispiel:



7. Finde das Ergebnis.

Beispiel:

$$7 - 4 = 3$$

$$5 - 2 = \square$$

$$9 - 8 = \square$$

$$3 - 3 = \square$$

$$6 - 1 = \square$$

$$4 - 4 = \square$$

$$3 - 2 = \square$$

$$8 - 2 = \square$$

$$5 - 1 = \square$$

$$3 - 0 = \square$$

$$6 - 4 = \square$$

$$2 - 2 = \square$$

$$7 - 5 = \square$$

8. Welche Zahl fehlt?

Beispiel:

$$\boxed{6} - 2 = 4$$

$$\boxed{} - 3 = 3$$

$$4 = 5 - \boxed{}$$

$$4 - 0 = \boxed{}$$

$$5 = \boxed{} - 1$$

$$\boxed{} - 4 = 2$$

$$\boxed{} = 6 - 6$$

$$6 - \boxed{} = 3$$

$$5 = \boxed{} - 3$$

$$\boxed{} - 1 = 2$$


$$3 = 4 - \boxed{}$$

$$6 - 1 = \boxed{}$$


$$2 = 2 - \boxed{}$$

9. Finde das Ergebnis.


Beispiel:




$$7 - 4 = \square$$




$$9 - 3 = \square$$



$$7 - 2 = \square$$



$$6 - 1 = \square$$



$$5 - 4 = \square$$

10. Finde das Ergebnis.

$6 - 0 = \underline{\quad}$

$6 - 1 = \underline{\quad}$

$6 - 2 = \underline{\quad}$

$6 - 3 = \underline{\quad}$

$6 - 4 = \underline{\quad}$

$6 - 5 = \underline{\quad}$

$6 - 6 = \underline{\quad}$

$7 - 0 = \underline{\quad}$

$7 - 1 = \underline{\quad}$

$7 - 2 = \underline{\quad}$

$7 - 3 = \underline{\quad}$

$7 - 4 = \underline{\quad}$

$7 - 5 = \underline{\quad}$

$7 - 6 = \underline{\quad}$

$7 - 7 = \underline{\quad}$

$8 - 0 = \underline{\quad}$

$8 - 1 = \underline{\quad}$

$8 - 2 = \underline{\quad}$

$8 - 3 = \underline{\quad}$

$8 - 4 = \underline{\quad}$

$8 - 5 = \underline{\quad}$

$8 - 6 = \underline{\quad}$

$8 - 7 = \underline{\quad}$

$8 - 8 = \underline{\quad}$

$9 - 0 = \underline{\quad}$

$9 - 1 = \underline{\quad}$

$9 - 2 = \underline{\quad}$

$9 - 3 = \underline{\quad}$

$9 - 4 = \underline{\quad}$

$9 - 5 = \underline{\quad}$

$9 - 6 = \underline{\quad}$

$9 - 7 = \underline{\quad}$

$9 - 8 = \underline{\quad}$

$9 - 9 = \underline{\quad}$

$10 - 0 = \underline{\quad}$

$10 - 1 = \underline{\quad}$

$10 - 2 = \underline{\quad}$

$10 - 3 = \underline{\quad}$

$10 - 4 = \underline{\quad}$

$10 - 5 = \underline{\quad}$

$10 - 6 = \underline{\quad}$

$10 - 7 = \underline{\quad}$

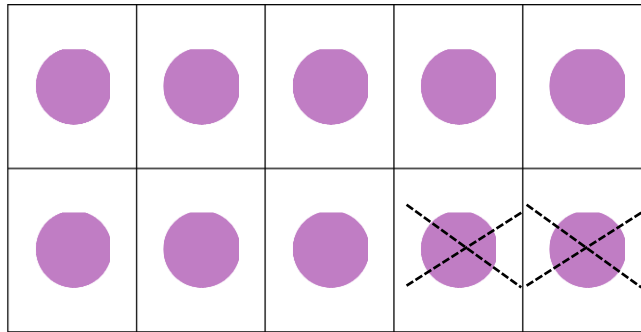
$10 - 8 = \underline{\quad}$

$10 - 9 = \underline{\quad}$

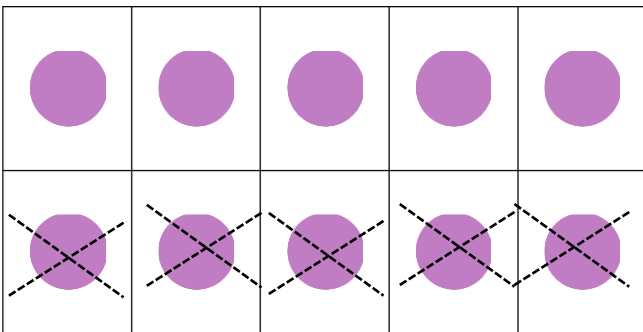
$10 - 10 = \underline{\quad}$

11. Schreibe zu jedem Bild die passende Aufgabe.

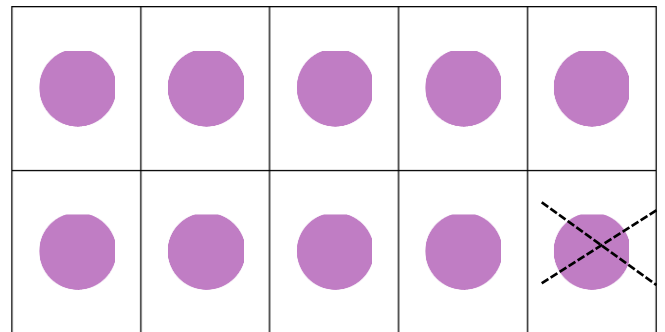
Beispiel:



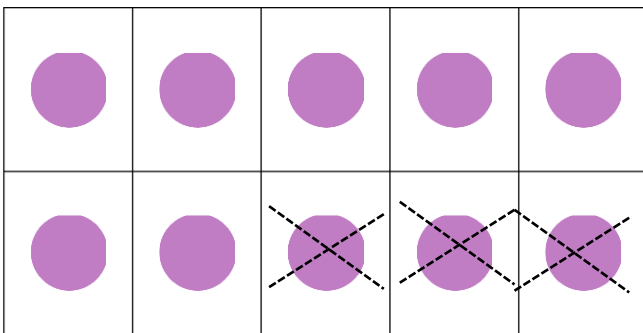
$$10 - 2 = 8$$



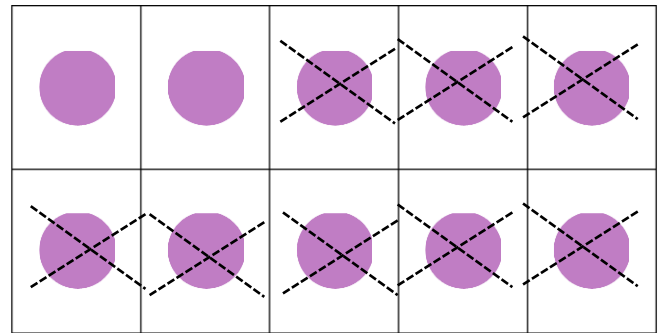
$$\underline{\quad} - \underline{\quad} = \underline{\quad}$$



$$\underline{\quad} - \underline{\quad} = \underline{\quad}$$



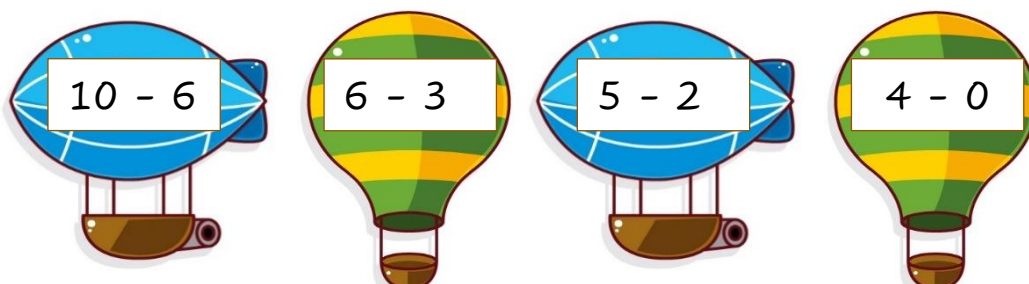
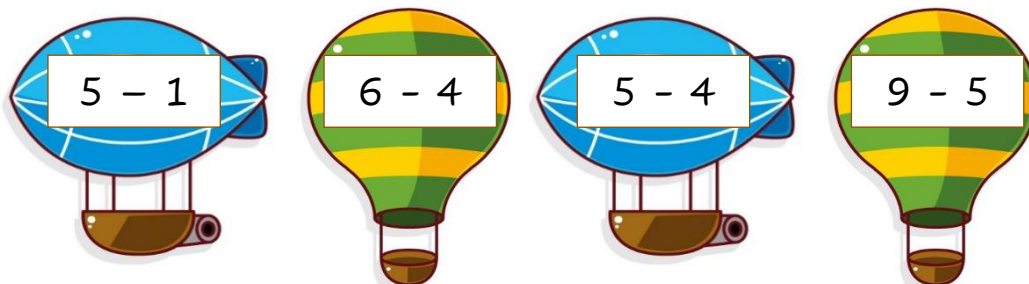
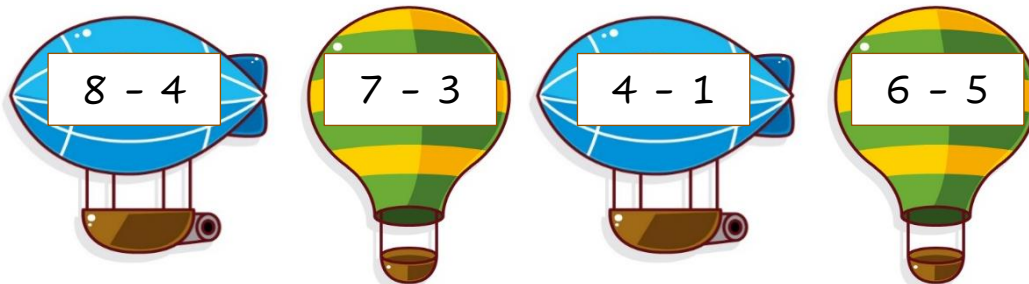
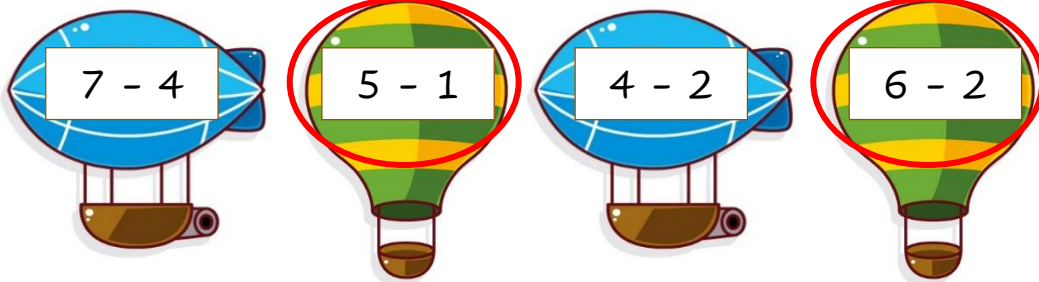
$$\underline{\quad} - \underline{\quad} = \underline{\quad}$$



$$\underline{\quad} - \underline{\quad} = \underline{\quad}$$

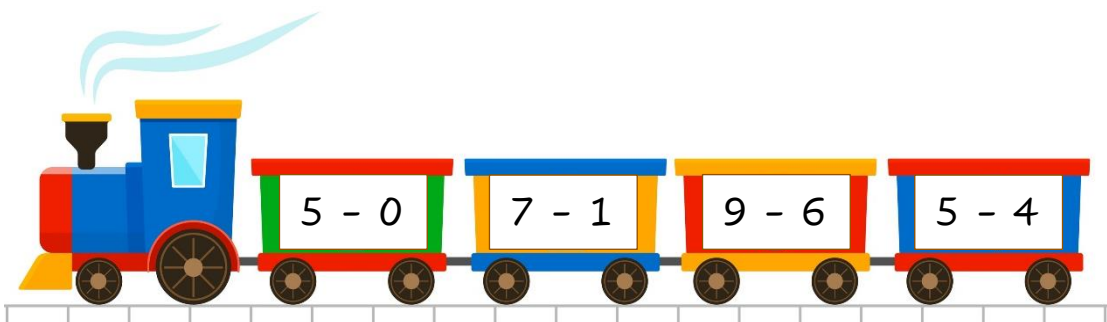
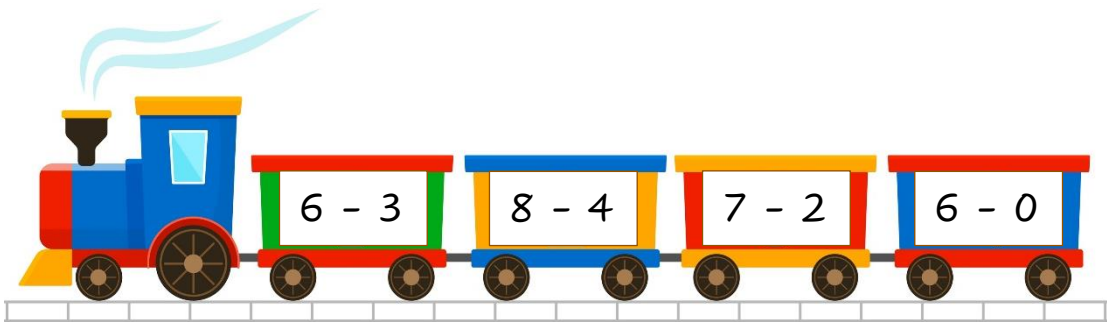
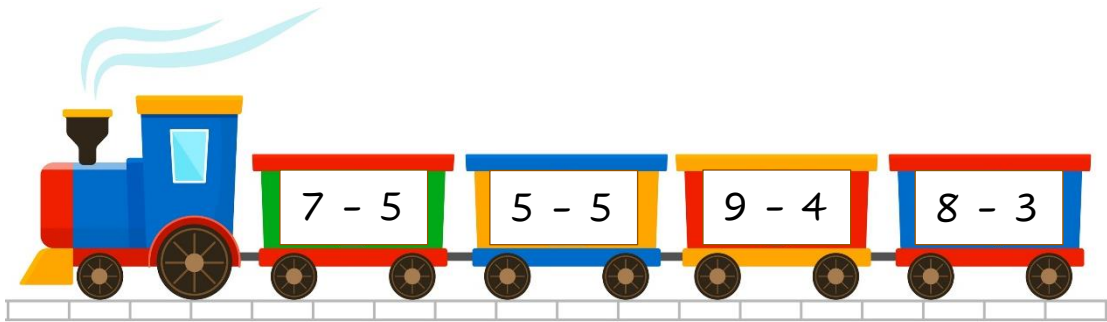
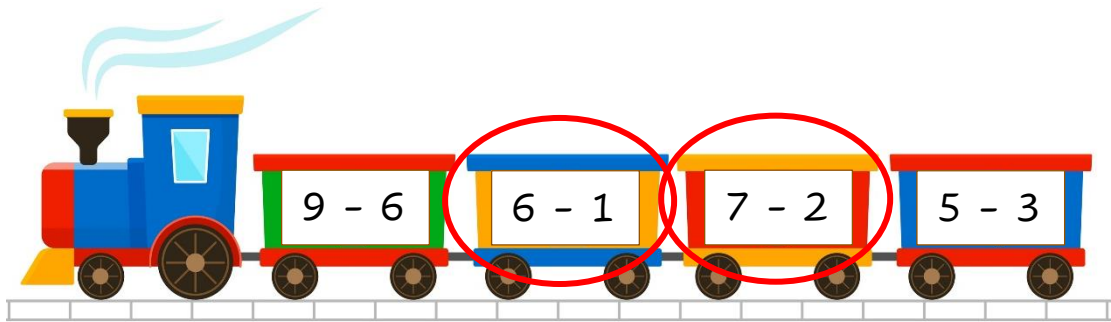
12. Kreise in jeder Zeile die Aufgaben ein, die das Ergebnis 4 haben.

Beispiel:



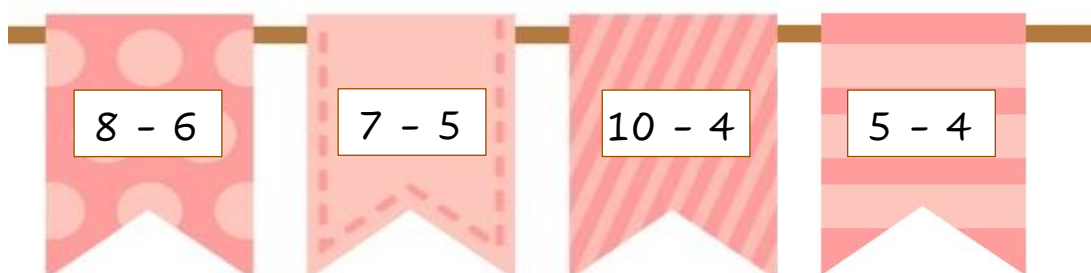
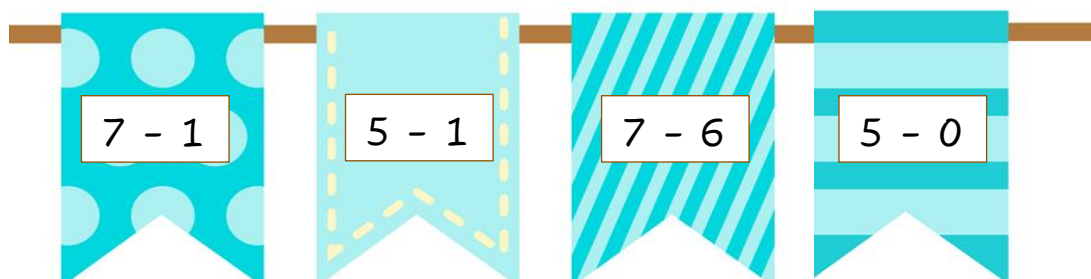
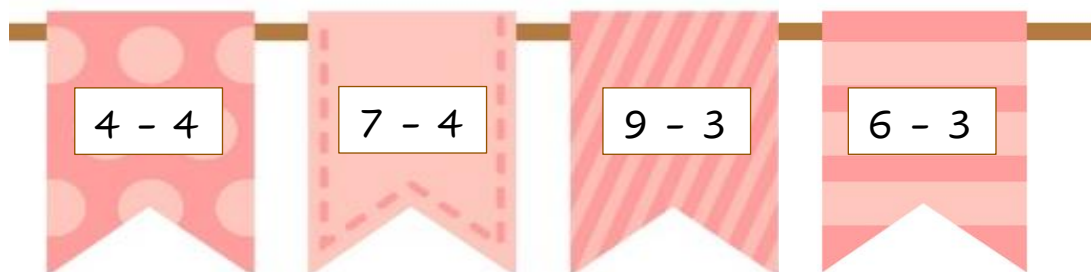
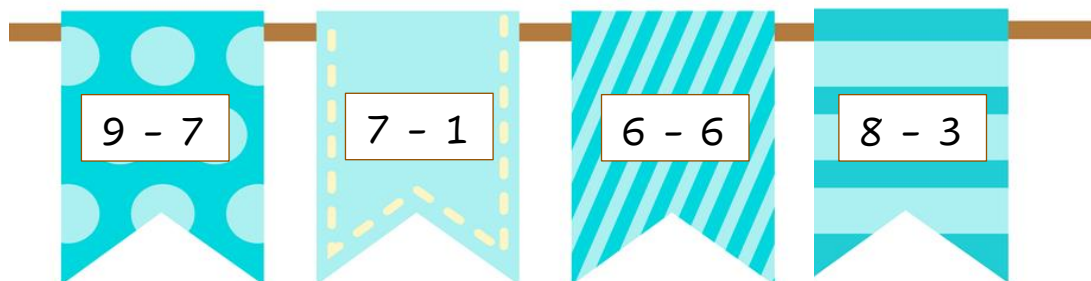
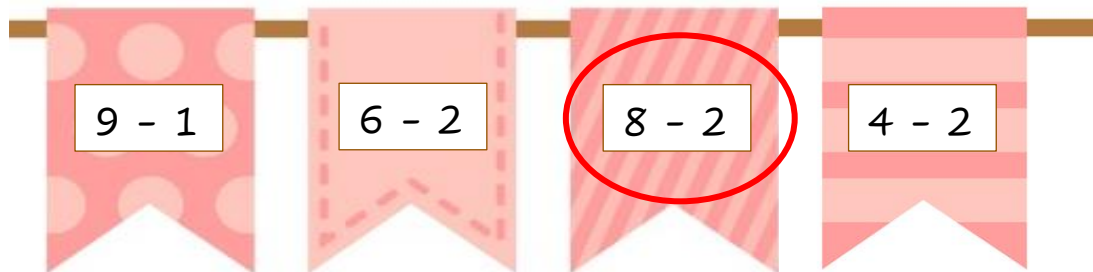
13. Kreise in jeder Zeile die Aufgaben ein, die das Ergebnis 5 haben.

Beispiel:



14. Kreise in jeder Zeile die Aufgaben ein, die das Ergebnis 6 haben.

Beispiel:



15. Finde das Ergebnis.

Beispiel:

$$7 - 4 = 3$$

$$5 - 2 = \square$$

$$9 - 8 = \square$$

$$3 - 3 = \square$$

$$6 - 1 = \square$$

$$4 - 4 = \square$$

$$3 - 2 = \square$$

$$8 - 2 = \square$$

$$5 - 1 = \square$$

$$3 - 0 = \square$$

$$6 - 4 = \square$$

$$2 - 2 = \square$$

$$7 - 5 = \square$$

16. Welche Zahl fehlt?

Beispiel:

$$\boxed{10} - 2 = 8$$

$$\boxed{} - 3 = 3 \qquad 4 = 5 - \boxed{}$$

$$4 - 0 = \boxed{} \qquad 9 = \boxed{} - 1$$

$$\boxed{} - 4 = 6 \qquad \boxed{} = 8 - 6$$

$$9 - \boxed{} = 3 \qquad 5 = \boxed{} - 3$$

$$\boxed{} - 7 = 2 \qquad 3 = 10 - \boxed{}$$

$$7 - 1 = \boxed{} \qquad 2 = 2 - \boxed{}$$