



1. Rita de prickar som behövs för att ramarna ska bli fulla, som i exemplet.


Exempel:




$$4 + 1 = 5$$



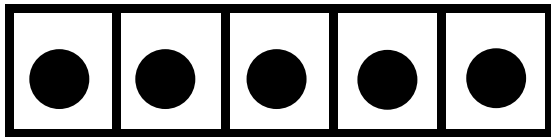
$$3 + \square = 5$$




$$0 + \square = 5$$



$$2 + \square = 5$$



$$5 + \square = 5$$

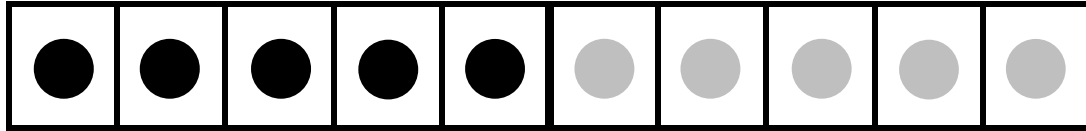


$$1 + \square = 5$$

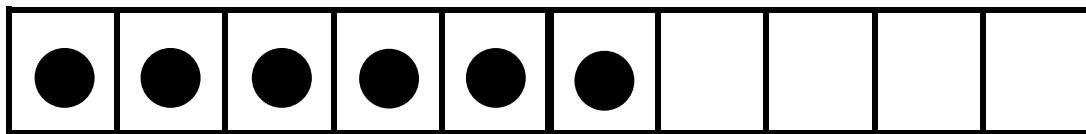


2. Rita de prickar som behövs för att fylla ramarna.

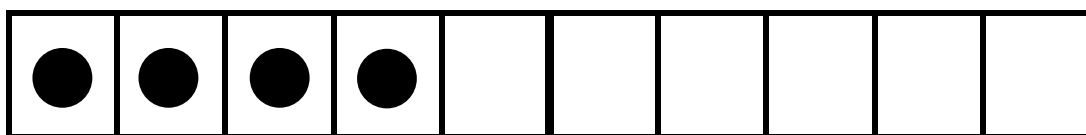
Exempel:




$$5 + 5 = 10$$



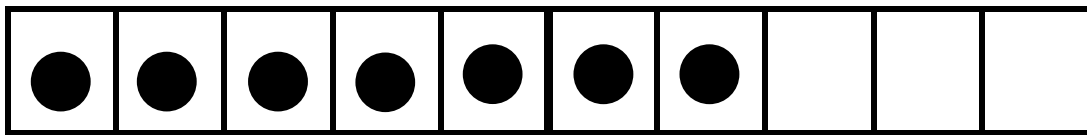
$$6 + \square = 10$$



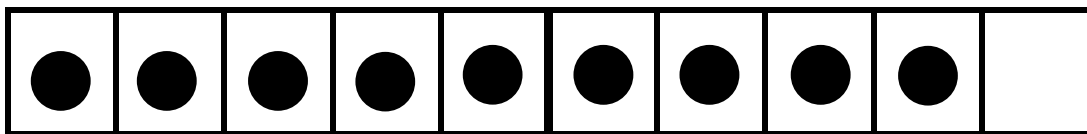
$$4 + \square = 10$$




$$2 + \square = 10$$



$$7 + \square = 10$$



$$9 + \square = 10$$



$$0 + \square = 10$$



3. Fyll i den siffra som saknas i meningarna.

Exempel:

Det finns 4 kuber. Jag måste lägga till 6 kuber till för att det ska bli 10.



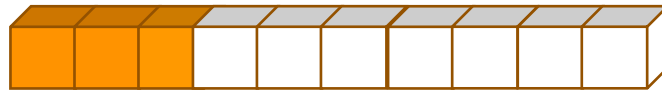
7 och ____ blir tio.



2 och ____ blir tio.



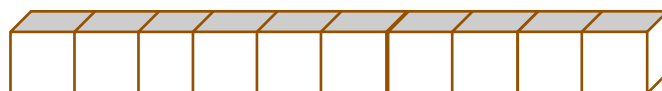
9 och ____ blir tio.



3 och ____ blir tio.



5 och ____ blir tio.



0 och ____ blir tio.



7 och ____ blir tio.